

# ADD & SUBTRACT GAME SHOW

ADDITION	SUBTRACTION	THIS OR THAT?	WORD PROBLEMS	MIXED BAG
100	100	100	100	100
200	200	200	200	200
300	300	300	300	300
400	400	400	400	400
500	500	500	500	500

ADD & SUBTRACT  
WHOLE NUMBERS

GAME  
SHOW

RESET  
PAGE


4.NBT.4



SELF-CHECKING | NO PREP

# WORKING SCOREBOARD

The scoreboard works **ONLY** in the PowerPoint version. Google Slides, unfortunately, does not have the same capabilities so you will need to track the scores on that version.



# INTERACTIVE GAMEBOARD

The point values only disappear after used on the Powerpoint version. Google Slides, unfortunately, does not have the same capabilities so you will need to keep track with the included question tracker.

ADDITION	SUBTRACTION	THIS OR THAT?	WORD PROBLEMS	MIXED BAG
100	100	100	100	100
200	200	200	200	200
300	300	300	300	300
400	400	400	400	400
500	500	500	500	500

**ADD & SUBTRACT  
WHOLE NUMBERS**


**GAME  
SHOW**

RESET  
PAGE

# CATEGORY 1: ADDITION

Students are given a variety of computation addition problems they must solve.


Solve the problem below.

$$107 + 9 =$$


ADDITION FOR 100

SCOREBOARD ANSWER GAME BOARD


Solve the problem below.

$$465 + 22 =$$


ADDITION FOR 200

SCOREBOARD ANSWER GAME BOARD


Solve the problem below.

$$921 + 849 =$$


ADDITION FOR 300

SCOREBOARD ANSWER GAME BOARD


Solve the problem below.

$$2,203 + 3,814 =$$


ADDITION FOR 400

SCOREBOARD ANSWER GAME BOARD

Solve the problem below.

$$55,018 + 95,995 =$$


ADDITION FOR 500

SCOREBOARD ANSWER GAME BOARD

# CATEGORY 2: SUBTRACTION

Students are given a variety of computation subtraction problems they must solve.

Solve the problem below.

$$87 - 9 =$$



SUBTRACTION FOR 100

SCOREBOARD

ANSWER

GAME BOARD

Solve the problem below.

$$472 - 91 =$$



SUBTRACTION FOR 200

SCOREBOARD

ANSWER

GAME BOARD

Solve the problem below.

$$503 - 322 =$$



SUBTRACTION FOR 300

SCOREBOARD

ANSWER

GAME BOARD

Solve the problem below.

$$4,815 - 3,584 =$$



SUBTRACTION FOR 400

SCOREBOARD

ANSWER

GAME BOARD

Solve the problem below.

$$98,008 - 79,165 =$$



SUBTRACTION FOR 500

SCOREBOARD

ANSWER

GAME BOARD

# CATEGORY 3: THIS OR THAT?

Students are given a word problem to read and then decide if they will add or subtract (this or that?) to find the answer.

The farmer owned a lot of land, and on it he had 34 cows. He just bought 47 more cows and put them with the other cows. How many cows does the farmer have now?

**THIS OR THAT?**  
81 cows      13 cows



THIS OR THAT? FOR 100

SCOREBOARD

ANSWER

GAME BOARD

A hiring manager for a new position started out the day with 52 applications on her desk that she needed to review. By the end of the day, she only had 9 applications left. How many applications was she able to review during the day?

**THIS OR THAT?**  
61 applications      43 applications



THIS OR THAT? FOR 200


SCOREBOARD

ANSWER

GAME BOARD

Last week, at the start of the season, the company shipped 2,488 boxes to customers. This week, they shipped 3,047 more boxes. How many boxes have they shipped in total?

**THIS OR THAT?**  
559 boxes      5,535 boxes



THIS OR THAT? FOR 300

SCOREBOARD

ANSWER

GAME BOARD

Builders & Company, a worldwide construction company, had plans to construct 10,005 buildings throughout the world. Now, they were asked to build 9,998 more. How many buildings will they be building in total?

**THIS OR THAT?**  
7 buildings      20,003 buildings



THIS OR THAT? FOR 400

SCOREBOARD

ANSWER

GAME BOARD

Abdul is working with the Forest Service to replant trees in areas that were affected by a wildfire. They have decided to plant 230,089 new trees throughout the country. So far, they have planted 198,106 trees. How many trees do they have left to plant?

**THIS OR THAT?**  
31,983 trees      428,195 trees



THIS OR THAT? FOR 500

SCOREBOARD

ANSWER

GAME BOARD

# CATEGORY 4: WORD PROBLEMS

Students are given a word problem where they will need to add or subtract whole numbers to find the answer.

The car dealership had 127 cars at the beginning of the week. By the end of the week, they had sold 48 cars. How many cars did the car dealership have at the end of the week?



WORD PROBLEMS FOR 100

SCOREBOARD

ANSWER

GAME BOARD

There were 452 people signed up to participate in the online conference. On the day of the event, 218 more signed up and participated. How many people participated in the online conference?



WORD PROBLEMS FOR 200

SCOREBOARD

ANSWER

GAME BOARD

Otis is working with his team to repair the highways in their state. At the start of the year, they had 3,420 miles of highways to repair. By July, they had finished 1,431 miles of highways. How many more miles of highways do they still have left to finish?



WORD PROBLEMS FOR 300

SCOREBOARD

ANSWER

GAME BOARD

Yanko's Joke Shop received 12,092 cans of silly string at the beginning of the summer. Two months later, they had 8,191 cans left. How many cans of silly string did they sell during those months?



WORD PROBLEMS FOR 400

SCOREBOARD

ANSWER

GAME BOARD

The state had 108,354 students register for classes. With the new boundary changes and age increases, 5,066 more students just registered. How many students are registered now?



WORD PROBLEMS FOR 500

SCOREBOARD

ANSWER

GAME BOARD

# CATEGORY 5: MIXED BAG

Students are given a variety of questions from each of the other categories.

Solve the problem below.

$$12,706 + 3,398 =$$



MIXED BAG FOR 100

SCOREBOARD

ANSWER

GAME BOARD

Solve the problem below.

$$42,304 - 17,539 =$$



MIXED BAG FOR 200

SCOREBOARD

ANSWER

GAME BOARD

A house originally cost \$254,000. An owner worked on the house, and after the improvements, the value of the house went up by \$4,560. What is the new value of the house?

**THIS OR THAT?**  
▶ \$249,440      \$258,560 ◀



MIXED BAG FOR 300

SCOREBOARD

ANSWER

GAME BOARD

Farmer Tim planted 489,035 apple trees on one half of his land. On the other half, he planted 501,991 orange trees. How many trees did Farmer Tim plant in total?



MIXED BAG FOR 400

SCOREBOARD

ANSWER

GAME BOARD

A company just launched their new smartphone. They want to see how it is doing in sales. For the launch, they originally made 126,090 smartphones. Now they only have 22,867 smartphones in stock. How many smartphones did they sell?



MIXED BAG FOR 500

SCOREBOARD

ANSWER

GAME BOARD




# ANSWER SLIDES BUILT IN

Questions are all linked to their corresponding answer slides in both versions.

Solve the problem below.

116




ADDITION FOR 100

SCOREBOARD GAME BOARD

Solve the problem below.

381



SUBTRACTION FOR 200

SCOREBOARD GAME BOARD

Last week, at the start of the season, the company shipped 2,488 boxes to customers. This week, they shipped 3,047 more boxes. How many boxes have they shipped in total?

THAT


5,535 boxes



THIS OR THAT? FOR 300

SCOREBOARD GAME BOARD


3,901 cans



WORD PROBLEMS FOR 400

SCOREBOARD GAME BOARD

103,223 smartphones



MIXED BAG FOR 500

SCOREBOARD GAME BOARD

# INCLUDES:

- ✓ POWERPOINT + GOOGLE SLIDES™
- ✓ INTERACTIVE & LINKED FOR EASY GAMEPLAY
- ✓ ANSWER KEY BUILT INTO GAME
- ✓ ENGAGING AND SUPER FUN
- ✓ REVIEW OF KEY CONTENT AND SKILLS
- ✓ TEACHER MANUAL
- ✓ EMAIL SUPPORT

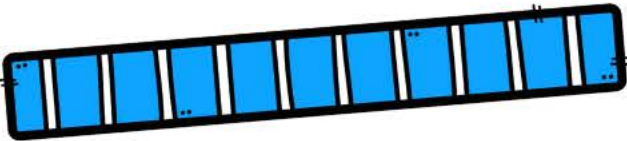
**STUDENTS  
WILL BE BEGGING  
TO PLAY!**



# Just Play-No Prep

**JUST OPEN THE  
GAME AND PLAY!  
PERFECT FOR WHOLE GROUP  
OR STATION WORK!**


Solve the problem below.

$$2,203 + 3,814 =$$


**ADDITION FOR 400**

ANSWER \_\_\_\_\_ GAME BOARD

Otis is working with his team to repair the highways in their state. At the start of the year, they had 3,420 miles of highways to repair. By July, they had finished 1,431 miles of highways. How many more miles of highways do they still have left to finish?




**WORD PROBLEMS FOR 300**

ANSWER \_\_\_\_\_

A hiring manager for a new position started out the day with 52 applications on her desk that she needed to review. By the end of the day, she only had 9 applications left. How many applications was she able to review during the day?

**THIS OR THAT?**

61 applications 43 applications



**THIS OR THAT? FOR 200**

ANSWER \_\_\_\_\_ GAME BOARD



**"AWESOME RESOURCE! WE USED THIS AS REVIEW BEFORE OUR ASSESSMENT AND IT COMPLETELY MATCHED UP WITH OUR CURRICULUM. MY STUDENTS LOVED THE GAME AND THE POWERPOINT RAN SMOOTHLY!"**



**"I OWN MULTIPLE GAME SHOWS BY THIS AUTHOR AND THEY ARE ALL GREAT. MY STUDENTS LOVE THEM AND THEY PROVIDE THE PERFECT AMOUNT OF CHALLENGE."**