

# NUMBER FORMS GAME SHOW

STANDARD FORM	WORD FORM	EXPANDED FORM	BASE TEN	COMPARE
100	100	100	100	100
200	200	200	200	200
300	300	300	300	300
400	400	400	400	400
500	500	500	500	500

4.NBT.2

NUMBER FORMS **GAME SHOW** 




SELF-CHECKING | NO PREP



# WORKING SCOREBOARD

The scoreboard works **ONLY** in the PowerPoint version. Google Slides, unfortunately, does not have the same capabilities so you will need to track the scores on that version.





# INTERACTIVE GAMEBOARD

The point values only disappear after used on the Powerpoint version. Google Slides, unfortunately, does not have the same capabilities so you will need to keep track with the included question tracker.

STANDARD FORM	WORD FORM	EXPANDED FORM	BASE TEN	COMPARE
100	100	100	100	100
200	200	200	200	200
300	300	300	300	300
400	400	400	400	400
500	500	500	500	500

**NUMBER FORMS** **GAME SHOW** [RESET PAGE](#)



# CATEGORY 1: STANDARD FORM

Students are given problems in which they will need to write their final answer in standard form.

Write the standard form of the number below.

four thousand,  
six hundred two



STANDARD FORM FOR 100

SCOREBOARD

ANSWER

GAME BOARD

Write the standard form of the number below.

$$10,000 + 5,000 + 700 + 60 + 8$$



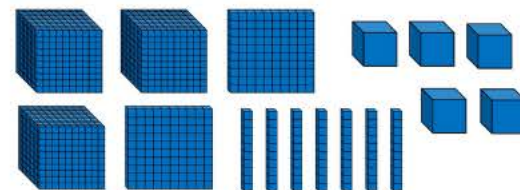
STANDARD FORM FOR 200

SCOREBOARD

ANSWER

GAME BOARD

Write the standard form of the number below.



STANDARD FORM FOR 300

SCOREBOARD

ANSWER

GAME BOARD

Write the standard form of the number below.

seventy thousand, nine  
hundred sixty-four



STANDARD FORM FOR 400

SCOREBOARD

ANSWER

GAME BOARD

Solve the problem below.

Members of a stamp-collecting club have three hundred fourteen thousand, seven hundred twelve stamps. How many stamps do they have, written in standard form?



STANDARD FORM FOR 500

SCOREBOARD

ANSWER

GAME BOARD



# CATEGORY 2: WORD FORM

Students are given problems in which they will need to write their final answer in word form.

Write the word form of the number below.

2,805



WORD FORM FOR 100

SCOREBOARD

ANSWER

GAME BOARD

Write the word form of the number below.

$$50,000 + 3,000 + 80 + 9$$



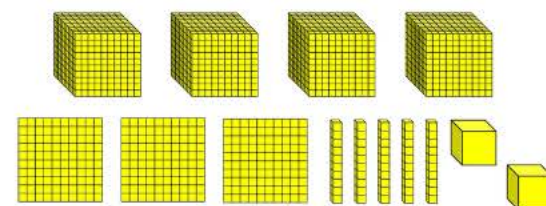
WORD FORM FOR 200

SCOREBOARD

ANSWER

GAME BOARD

Write the word form of the number below.



WORD FORM FOR 300

SCOREBOARD

ANSWER

GAME BOARD

Write the word form of the number below.

840,655



WORD FORM FOR 400

SCOREBOARD

ANSWER

GAME BOARD

Solve the problem below.

The Guinness Book of World Records states one of its videos on YouTube reached 1,250,659 views. How many views is that in word form?



WORD FORM FOR 500

SCOREBOARD

ANSWER

GAME BOARD



# CATEGORY 3: EXPANDED FORM

Students are given problems in which they will need to write their final answer in expanded form.

Write the expanded form of the number below.

forty-seven thousand,  
five hundred two



EXPANDED FORM FOR 100

SCOREBOARD

ANSWER

GAME BOARD

Write the expanded form of the number below.

484,205



EXPANDED FORM FOR 200

SCOREBOARD

ANSWER

GAME BOARD

Write the expanded form of the number below.

seven hundred  
thirteen thousand,  
twenty-three



EXPANDED FORM FOR 300

SCOREBOARD

ANSWER

GAME BOARD

Write the expanded form of the number below.

three hundred eighty-  
two thousand, nine  
hundred thirty-four



EXPANDED FORM FOR 400

SCOREBOARD

ANSWER

GAME BOARD

Solve the problem below.

On average, children 8-12 years old spend one hundred three thousand, six hundred sixty minutes on screens each year. Write that number in expanded form.



EXPANDED FORM FOR 500

SCOREBOARD

ANSWER

GAME BOARD



# CATEGORY 4: BASE TEN

Students are given problems in which they will need to write their final answer in base ten form.

Draw base ten blocks to represent the number below.

405



BASE TEN FOR 100

SCOREBOARD

ANSWER

GAME BOARD

Draw base ten blocks to represent the number below.

663



BASE TEN FOR 200

SCOREBOARD

ANSWER

GAME BOARD

Draw base ten blocks to represent the number below.

5,002



BASE TEN FOR 300

SCOREBOARD

ANSWER

GAME BOARD

Draw base ten blocks to represent the number below.

8,320



BASE TEN FOR 400

SCOREBOARD

ANSWER

GAME BOARD

Draw base ten blocks to represent the number below.

4,306



BASE TEN FOR 500

SCOREBOARD

ANSWER

GAME BOARD



# CATEGORY 5: COMPARE

Students are given two whole numbers and they must compare them using  $<$ ,  $>$ ,  $=$ .

Compare using  $<$ ,  $>$ , or  $=$ .

$3,502 \bigcirc 3,520$



COMPARE FOR 100

SCOREBOARD

ANSWER

GAME BOARD

Compare using  $<$ ,  $>$ , or  $=$ .

$15,880 \bigcirc 15,808$



COMPARE FOR 200

SCOREBOARD

ANSWER

GAME BOARD

Compare using  $<$ ,  $>$ , or  $=$ .

$206,850 \bigcirc 206,850$



COMPARE FOR 300

SCOREBOARD

ANSWER

GAME BOARD

Compare using  $<$ ,  $>$ , or  $=$ .

$899,505 \bigcirc 890,950$



COMPARE FOR 400

SCOREBOARD

ANSWER

GAME BOARD

Compare using  $<$ ,  $>$ , or  $=$ .

The local theme park had 614,087 visitors in 2018. In 2019, they had 604,807 visitors. Compare the number of visitors the theme park had in 2018 and 2019. Which year had more visitors?



COMPARE FOR 500

SCOREBOARD

ANSWER

GAME BOARD



# ANSWER SLIDES BUILT IN

Questions are all linked to their corresponding answer slides in both versions.

Write the standard form of the number below.

4,602



STANDARD FORM FOR 100

SCOREBOARD

GAME BOARD

Write the word form of the number below.

fifty-three thousand, eighty-nine



WORD FORM FOR 200

SCOREBOARD

GAME BOARD

Write the expanded form of the number below.

$700,000 + 10,000 + 3,000 + 20 + 3$

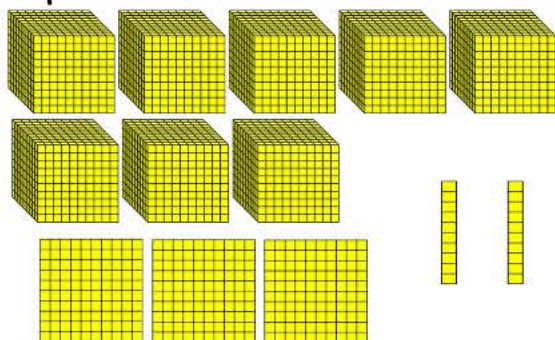


EXPANDED FORM FOR 300

SCOREBOARD

GAME BOARD

Draw base ten blocks to represent the number below.



BASE TEN FOR 400

SCOREBOARD

GAME BOARD

Compare using  $<$ ,  $>$ , or  $=$ .

$614,087 > 604,807$

2018 had more visitors than 2019.



COMPARE FOR 500

SCOREBOARD

GAME BOARD



# INCLUDES:

- ✓ POWERPOINT + GOOGLE SLIDES™
- ✓ INTERACTIVE & LINKED FOR EASY GAMEPLAY
- ✓ ANSWER KEY BUILT INTO GAME
- ✓ ENGAGING AND SUPER FUN
- ✓ REVIEW OF KEY CONTENT AND SKILLS
- ✓ TEACHER MANUAL
- ✓ EMAIL SUPPORT

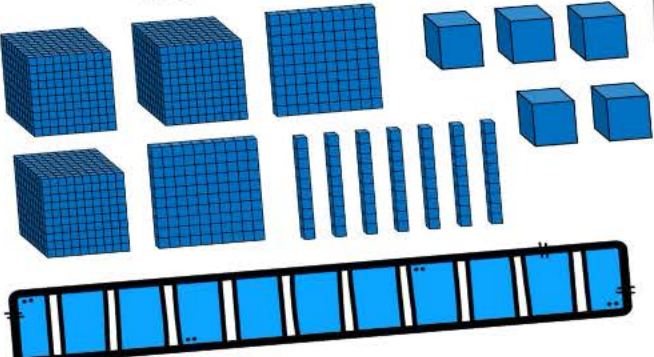
**STUDENTS  
WILL BE BEGGING  
TO PLAY!**





# Just Play-NO Prep

Write the standard form of the number below.




STANDARD FORM FOR 300

ANSWER \_\_\_\_\_

GAME BOARD

Write the expanded form of the number below.

forty-seven thousand, five hundred two




EXPANDED FORM FOR 100

ANSWER \_\_\_\_\_

GAME BOARD

Compare using  $<$ ,  $>$ , or  $=$ .

The local theme park had 614,087 visitors in 2018. In 2019, they had 604,807 visitors. Compare the number of visitors the theme park had in 2018 and 2019. Which year had more visitors?



COMPARE FOR 500

ANSWER \_\_\_\_\_

GAME BOARD

**JUST OPEN THE  
GAME AND PLAY!  
PERFECT FOR WHOLE GROUP  
OR STATION WORK!**



**"MY STUDENTS LOVED USING THIS RESOURCE FOR A HANDS ON SMALL GROUP! VERY EASY TO PREPARE AND MY STUDENTS WERE ENGAGED THE WHOLE TIME! THANK YOU FOR THIS AMAZING RESOURCE!"**



**"MY STUDENTS REALLY ENJOYED PLAYING THIS GAME! IT WAS EASY TO IMPLEMENT AND PLAY WITH STUDENTS!"**