

PLACE VALUE GAME SHOW

PATTERNS	STANDARD FORM	EXPANDED FORM	WORD FORM	COMPARE
100	100	100	100	100
200	200	200	200	200
300	300	300	300	300
400	400	400	400	400
500	500	500	500	500
PLACE VALUE			GAME SHOW	RESET PAGE


4TH GRADE



SELF-CHECKING | NO PREP

WORKING SCOREBOARD

The scoreboard works **ONLY** in the PowerPoint version. Google Slides, unfortunately, does not have the same capabilities so you will need to track the scores on that version.



INTERACTIVE GAMEBOARD

The point values only disappear after used on the Powerpoint version. Google Slides, unfortunately, does not have the same capabilities so you will need to keep track with the included question tracker.

PATTERNS	STANDARD FORM	EXPANDED FORM	WORD FORM	COMPARE
100	100	100	100	100
200	200	200	200	200
300	300	300	300	300
400	400	400	400	400
500	500	500	500	500

PLACE VALUE

GAME SHOW

RESET PAGE

CATEGORY 1: PATTERNS

Students are given questions about place value patterns and they must determine whether a number in one place is valued 10 times or $\frac{1}{10}$ of a number in another place.

What is the value of the underlined digit?

6,876



PATTERNS FOR 100

SCOREBOARD

ANSWER

GAME BOARD

What is the value of the underlined digit?

45,546



PATTERNS FOR 200

SCOREBOARD

ANSWER

GAME BOARD

4,558

The 5 in the hundreds place represents a value that is ____ times greater than the 5 in the tens place.



PATTERNS FOR 300

SCOREBOARD

ANSWER

GAME BOARD

54,480

The 4 in the thousands place represents a value that is ____ times greater than the 4 in the hundreds place.



PATTERNS FOR 400

SCOREBOARD

ANSWER

GAME BOARD

833,330

The 3 in the thousands place represents a value that is 100 times greater than the 3 in the ____ place.



PATTERNS FOR 500

SCOREBOARD

ANSWER

GAME BOARD

CATEGORY 2: STANDARD FORM

Students are given numbers written in expanded or word form and they must change them to standard form.

Write the following number in standard form.

ten thousand,
forty-two



STANDARD FORM FOR 100

SCOREBOARD

ANSWER

GAME BOARD

Write the following number in standard form.

$$(2 \times 100,000) + \\ (5 \times 1,000) + \\ (4 \times 100) + (8 \times 1)$$



STANDARD FORM FOR 200

SCOREBOARD

ANSWER

GAME BOARD

Write the following number in standard form.

one hundred
fourteen thousand,
six hundred six



STANDARD FORM FOR 300

SCOREBOARD

ANSWER

GAME BOARD

Write the following number in standard form.

$$(5 \times 100,000) + \\ (3 \times 10,000) + \\ (7 \times 1,000) + (6 \times 10)$$



STANDARD FORM FOR 400

SCOREBOARD

ANSWER

GAME BOARD

The population of Orlando,
Florida is about two hundred
thirty-eight thousand, three
hundred. Write the population
in standard form.



STANDARD FORM FOR 500

SCOREBOARD

ANSWER

GAME BOARD

CATEGORY 3: EXPANDED FORM

Students are given numbers written in standard or word form and they must change them to expanded form.

Write the number below in expanded form.

670



EXPANDED FORM FOR 100

SCOREBOARD

ANSWER

GAME BOARD

Write the number below in expanded form.

6,961



EXPANDED FORM FOR 200

SCOREBOARD

ANSWER

GAME BOARD

Write the number below in expanded form.

40,065



EXPANDED FORM FOR 300

SCOREBOARD

ANSWER

GAME BOARD

There are 9,956 species of birds in the world. Write this number in expanded form.



EXPANDED FORM FOR 400

SCOREBOARD

ANSWER

GAME BOARD

The population of people 95 years and older is about 337,238. Write this number in expanded form.



EXPANDED FORM FOR 500

SCOREBOARD

ANSWER

GAME BOARD

CATEGORY 4: WORD FORM

Students are given numbers written in expanded or standard form and they must change them to word form.

Write the following number in word form.

129



WORD FORM FOR 100

SCOREBOARD

ANSWER

GAME BOARD

Write the following number in word form.

3,709



WORD FORM FOR 200

SCOREBOARD

ANSWER

GAME BOARD

The distance around the Earth is 40,075 kilometers. Write that distance in word form.



WORD FORM FOR 300

SCOREBOARD

ANSWER

GAME BOARD

Write the following number in word form.

300,550



WORD FORM FOR 400

SCOREBOARD

ANSWER

GAME BOARD

Write the following number in word form.

769,651



WORD FORM FOR 500

SCOREBOARD

ANSWER


GAME BOARD

CATEGORY 5: COMPARING NUMBERS

Students are given two whole numbers up to the hundred thousand place that they need to compare using $<$, $>$, or $=$.

Compare. Write $<$, $>$, or $=$

4,787 ● 4,787




COMPARE FOR 100

SCOREBOARD ANSWER GAME BOARD

Compare. Write $<$, $>$, or $=$

432,885 ● 423,885




COMPARE FOR 200

SCOREBOARD ANSWER GAME BOARD

Compare. Write $<$, $>$, or $=$


4,787 ● 4,787



COMPARE FOR 300

SCOREBOARD ANSWER GAME BOARD


The students at Oak Hill Elementary raised \$5,875 and Granite Elementary raised \$5,578 for the fundraiser. Which school raised more money?



COMPARE FOR 400

SCOREBOARD ANSWER GAME BOARD

There are about 79,564 giraffes and about 79,654 humpback whales. Which animal has the larger population?



COMPARE FOR 500

SCOREBOARD ANSWER GAME BOARD

ANSWER SLIDES BUILT IN

Questions are all linked to their corresponding answer slides in both versions.

800



PATTERNS FOR 100

SCOREBOARD

GAME BOARD

205,408



STANDARD FORM FOR 200

SCOREBOARD

GAME BOARD

40,000 +
60 + 5



EXPANDED FORM FOR 300

SCOREBOARD

GAME BOARD

Three hundred
thousand, five
hundred fifty.



WORD FORM FOR 400

SCOREBOARD

GAME BOARD

Humpback
Whales



COMPARE FOR 500

SCOREBOARD

GAME BOARD

INCLUDES:

- ✓ POWERPOINT + GOOGLE SLIDES™
- ✓ INTERACTIVE & LINKED FOR EASY GAMEPLAY
- ✓ ANSWER KEY BUILT INTO GAME
- ✓ ENGAGING AND SUPER FUN
- ✓ REVIEW OF KEY CONTENT AND SKILLS
- ✓ TEACHER MANUAL
- ✓ EMAIL SUPPORT


**STUDENTS
WILL BE BEGGING
TO PLAY!**




Just Play-No Prep

**JUST OPEN THE
GAME AND PLAY!
PERFECT FOR WHOLE GROUP
OR STATION WORK!**

Compare. Write $<$, $>$, or $=$

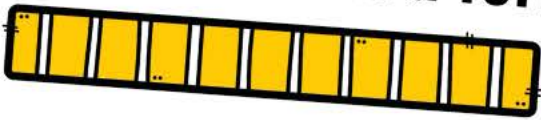
4,787  4,787



COMPARE FOR 300

GAME BOARD

The distance around the Earth is 40,075 kilometers. Write that distance in word form.

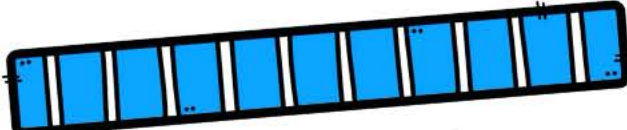


WORD FORM FOR 300

GAME BOARD

833,330

The 3 in the thousands place represents a value that is 100 times greater than the 3 in the ____ place.



PATTERNS FOR 500

GAME BOARD



"MY STUDENTS ABSOLUTELY LOVED THIS GAME! I LOVED THE FACT IT WAS IN GAME FORMAT AND STUDENTS WERE GETTING A REVIEW OF SKILLS."



"THIS WAS GREAT FOR HELPING TO ENGAGE MY STUDENTS WITH THIS LEARNING STANDARD. THE KIDS LOVED BEING ON TEAMS AND PLAYING THIS GAME."