

ROUNDING DECIMALS GAME SHOW

THIS OR THAT?	UNDERLINED DIGIT	ROUND	NUMBER LINES	WORD PROBLEMS
100	100	100	100	100
200	200	200	200	200
300	300	300	300	300
400	400	400	400	400
500	500	500	500	500

5.NB.4


ROUNDING DECIMALS **GAME SHOW** 



SELF-CHECKING | NO PREP

WORKING SCOREBOARD

The scoreboard works **ONLY** in the PowerPoint version. Google Slides, unfortunately, does not have the same capabilities so you will need to track the scores on that version.



INTERACTIVE GAMEBOARD

The point values only disappear after used on the Powerpoint version. Google Slides, unfortunately, does not have the same capabilities so you will need to keep track with the included question tracker.

THIS OR THAT?	UNDERLINED DIGIT	ROUND	NUMBER LINES	WORD PROBLEMS
100	100	100	100	100
200	200	200	200	200
300	300	300	300	300
400	400	400	400	400
500	500	500	500	500

ROUNDING DECIMALS GAME SHOW [RESET PAGE](#)

CATEGORY 1: THIS OR THAT?

Students are given a variety of decimals and they need to round and choose between the two given answers...this or that?

Round to the nearest tenth.

0.52

Is your answer...

THIS OR THAT?

0.5

0.6

THIS OR THAT? FOR 100

SCOREBOARD

ANSWER

GAME BOARD

Round to the nearest hundredth.

14.252

Is your answer...

THIS OR THAT?

14.25

14.26

THIS OR THAT? FOR 200

SCOREBOARD

ANSWER

GAME BOARD

Round to the nearest whole number.

23.709

Is your answer...

THIS OR THAT?

23

24

THIS OR THAT? FOR 300

SCOREBOARD

ANSWER

GAME BOARD

Round to the nearest hundredth.

0.755

Is your answer...

THIS OR THAT?

0.75

0.76

THIS OR THAT? FOR 400

SCOREBOARD

ANSWER

GAME BOARD

Round to the nearest tenth.

4.953

Is your answer...

THIS OR THAT?

4.9

5

THIS OR THAT? FOR 500

SCOREBOARD

ANSWER

GAME BOARD

CATEGORY 2: UNDERLINED DIGIT

Students are given a variety of decimals with one digit underlined and they must round to the place of the underlined digit.

Round to the place of
the underlined digit.

0.314

UNDERLINED DIGIT FOR 100

SCOREBOARD

ANSWER

GAME BOARD

Round to the place of
the underlined digit.

2.406

UNDERLINED DIGIT FOR 200

SCOREBOARD

ANSWER

GAME BOARD

Round to the place of
the underlined digit.

45.158

UNDERLINED DIGIT FOR 300

SCOREBOARD

ANSWER

GAME BOARD

Round to the place of
the underlined digit.

5.057

UNDERLINED DIGIT FOR 400

SCOREBOARD

ANSWER

GAME BOARD

Round to the place of
the underlined digit.

3.296

UNDERLINED DIGIT FOR 500

SCOREBOARD

ANSWER

GAME BOARD

CATEGORY 3: ROUND

Students are given a decimal and they must round to the given place.

Round to the nearest
HUNDREDTH.

7.428

ROUND FOR 100

SCOREBOARD

ANSWER

GAME BOARD

Round to the nearest
TENTH.

162.36

ROUND FOR 200

SCOREBOARD

ANSWER

GAME BOARD

Round to the nearest
WHOLE NUMBER.

6.37

ROUND FOR 300

SCOREBOARD

ANSWER

GAME BOARD

Round to the nearest
TENTH.

7.982

ROUND FOR 400

SCOREBOARD

ANSWER

GAME BOARD

Round to the nearest
HUNDREDTH.

13.053

ROUND FOR 500

SCOREBOARD

ANSWER

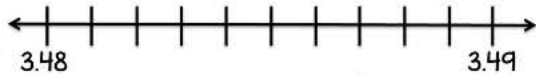
GAME BOARD

CATEGORY 4: NUMBER LINES

Students are given decimals on a number line and they must round to the given place.

Use the number line to round the number to the nearest **HUNDREDTH.**

3.482



NUMBER LINES FOR 100

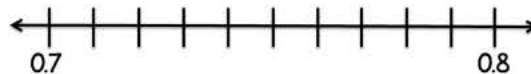
SCOREBOARD

ANSWER

GAME BOARD

Use the number line to round the number to the nearest **TENTH.**

0.72



NUMBER LINES FOR 200

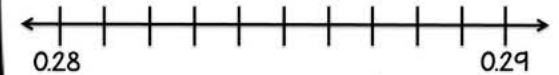
SCOREBOARD

ANSWER

GAME BOARD

Use the number line to round the number to the nearest **HUNDREDTH.**

0.285



NUMBER LINES FOR 300

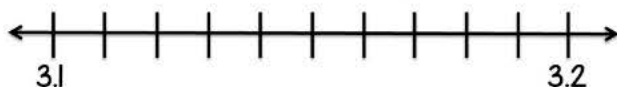
SCOREBOARD

ANSWER

GAME BOARD

Use the number line to round the number to the nearest **TENTH.**

3.174



NUMBER LINES FOR 400

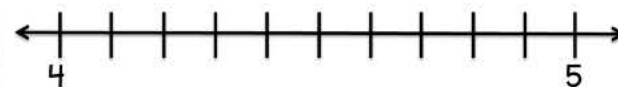
SCOREBOARD

ANSWER

GAME BOARD

Use the number line to round the number to the nearest **WHOLE NUMBER.**

4.561



NUMBER LINES FOR 500

SCOREBOARD

ANSWER

GAME BOARD

CATEGORY 5: WORD PROBLEMS

Students are given a variety of word problems in which they are asked to round decimals to solve.

A giraffe can run an average speed of 32.34 miles per hour. What is the giraffe's average speed when rounded to the nearest tenth?

WORD PROBLEMS FOR 100

SCOREBOARD

ANSWER

GAME BOARD

Gabriel spends 6.75 hours each day at school. How long is Gabriel at school each day when rounded to the nearest hour?

WORD PROBLEMS FOR 200

SCOREBOARD

ANSWER

GAME BOARD

Cassidy went with her grandfather to fill his car with gas. The price for a gallon of gas was \$3.299. What is the cost of a gallon of gas rounded to the nearest cent??

WORD PROBLEMS FOR 300

SCOREBOARD

ANSWER

GAME BOARD

The smallest frog measures, on average, 7.719 millimeters in length. How long is the frog when rounded to the nearest hundredth of a millimeter?

WORD PROBLEMS FOR 400

SCOREBOARD

ANSWER

GAME BOARD

A chimpanzee weighs an average of 52.16 kilograms. What is the weight of the chimpanzee when rounded to the nearest tenth of a kilogram?

WORD PROBLEMS FOR 500

SCOREBOARD

ANSWER

GAME BOARD

ANSWER SLIDES BUILT IN

Questions are all linked to their corresponding answer slides in both versions.

Round to the nearest tenth.

0.52

Is your answer...

THIS
0.5

THIS OR THAT? FOR 100

SCOREBOARD

GAME BOARD

Round to the place of the underlined digit.

2.41

UNDERLINED DIGIT FOR 200

SCOREBOARD

GAME BOARD

Round to the nearest **WHOLE NUMBER.**

6

ROUND FOR 300

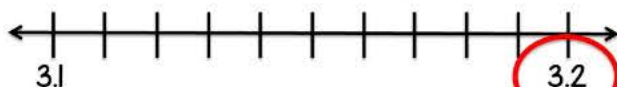
SCOREBOARD

GAME BOARD

Use the number line to round the number to the nearest

TENTH.

3.174



NUMBER LINES FOR 400

SCOREBOARD

GAME BOARD

52.2
kilograms

WORD PROBLEMS FOR 500

SCOREBOARD

GAME BOARD



INCLUDES:

- ✓ POWERPOINT + GOOGLE SLIDES™
- ✓ INTERACTIVE & LINKED FOR EASY GAMEPLAY
- ✓ ANSWER KEY BUILT INTO GAME
- ✓ ENGAGING AND SUPER FUN
- ✓ REVIEW OF KEY CONTENT AND SKILLS
- ✓ TEACHER MANUAL
- ✓ EMAIL SUPPORT

**STUDENTS
WILL BE BEGGING
TO PLAY!**



Just Play-NO Prep

**JUST OPEN THE
GAME AND PLAY!
PERFECT FOR WHOLE GROUP
OR STATION WORK!**

Round to the nearest whole number.
23.709
Is your answer...
THIS OR THAT?
23 24
THIS OR THAT? FOR 300
GAME BOARD

Use the number line to round the number to the nearest **HUNDREDTH.**
3.482
48 3.49
NUMBER LINES FOR 100
ARD

Gabriel spends 6.75 hours each day at school. How long is Gabriel at school each day when rounded to the nearest hour?
WORD PROBLEMS FOR 200
GAME BOARD



"THIS WAS A GREAT RESOURCE FOR MY 5TH GRADE CLASS! A FUN, ENGAGING WAY TO REVIEW CONCEPTS BEFORE A TEST. I LOVE THE FORMAT AND IT WAS EASY TO DOWNLOAD AND USE. THANK YOU SO MUCH!!"



"I USED THIS DURING ONE OF OUR ZOOM MEETINGS AND MADE IT INTO A COMPETITION BETWEEN MY ZOOM GROUPS. WHAT A HIT! THE STUDENTS LOVED IT ... THIS WAS A GREAT WAY TO REVIEW DECIMALS AND WAS SUPER EASY TO USE. THANK YOU FOR THIS RESOURCE!"