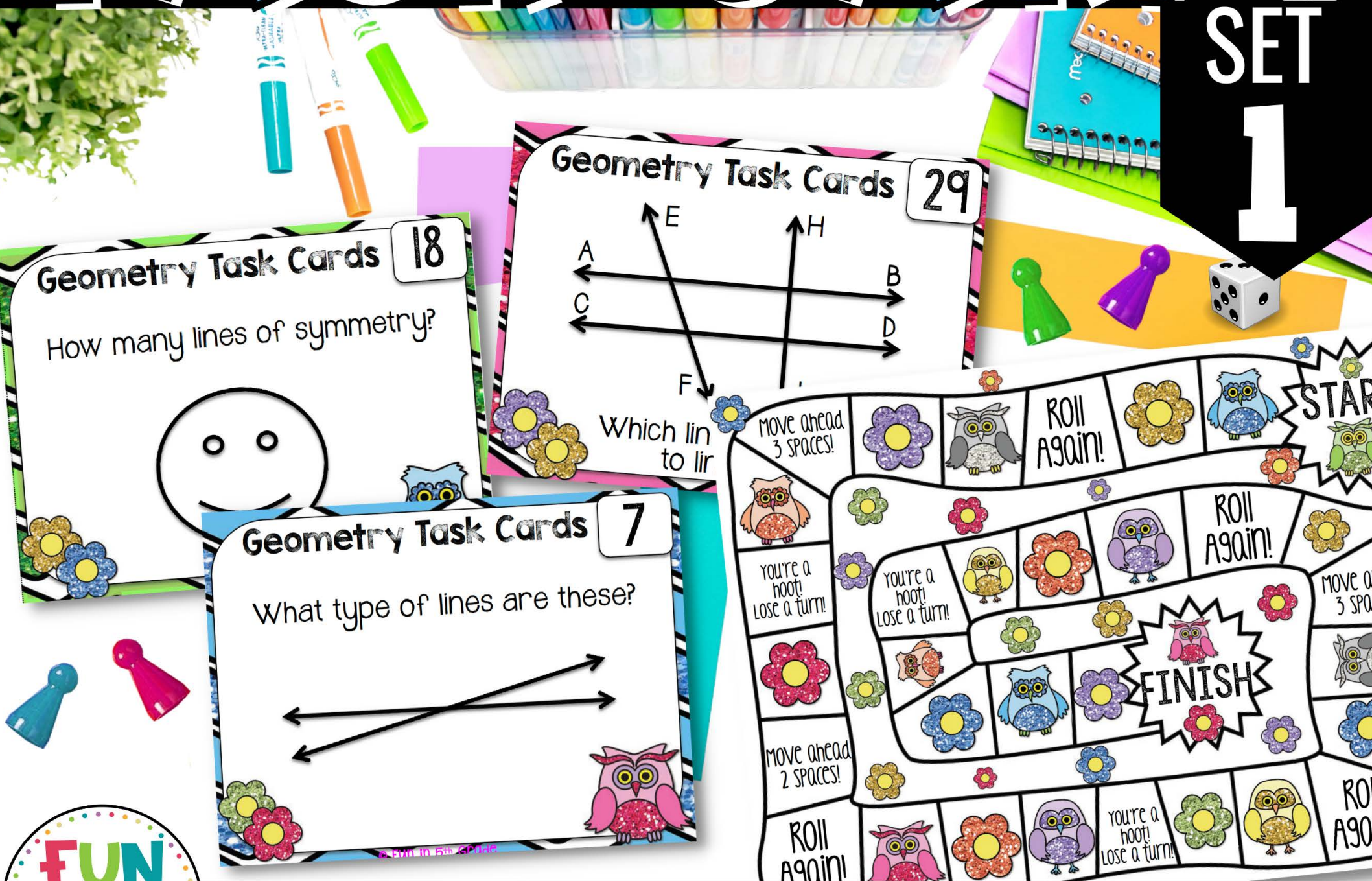


GEOOMETRY TASK CARDS

SET 1




32 REVIEW CARDS

32 DIFFERENT CARDS

TO PRACTICE THE SKILL!


Geometry Task Cards 1

Name the figure.




Geometry Task Cards 2

Name the figure.




Geometry Task Cards 3

Name the figure.




Geometry Task Cards 4

Name the figure.



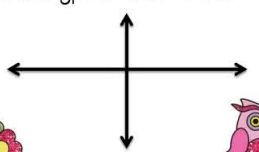
Geometry Task Cards 5

What type of lines are these?




Geometry Task Cards 6

What type of lines are these?



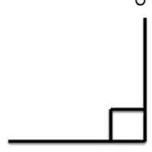
Geometry Task Cards 7

What type of lines are these?




Geometry Task Cards 8

Name this angle.




Geometry Task Cards 9

Name the figure.




Geometry Task Cards 10

Name the figure.




Geometry Task Cards 11

Name the figure.




Geometry Task Cards 12

Name the figure.



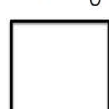
Geometry Task Cards 13

How many ways can you name this figure?




Geometry Task Cards 14

How many ways can you name this figure?




Geometry Task Cards 15

How many ways can you name this figure?



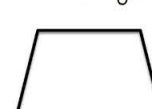
Geometry Task Cards 16

How many ways can you name this figure?




Geometry Task Cards 17

How many ways can you name this figure?




Geometry Task Cards 18

How many lines of symmetry?




Geometry Task Cards 19

How many lines of symmetry?



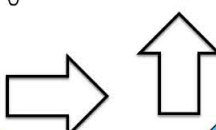
Geometry Task Cards 20

How many lines of symmetry?




Geometry Task Cards 21

Congruent, similar, or neither?




Geometry Task Cards 22

Congruent, similar, or neither?




Geometry Task Cards 23

How many lines of symmetry?

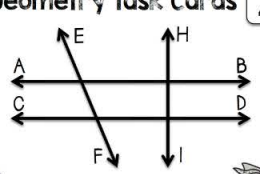


Geometry Task Cards 24

Congruent, similar, or neither?

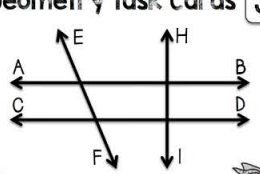


Geometry Task Cards 29



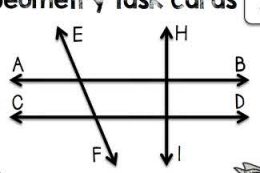
Which line is parallel to line AB?

Geometry Task Cards 30



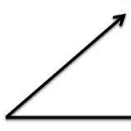
Which line is perpendicular to line CB?

Geometry Task Cards 31



Name a line that intersects line EF?

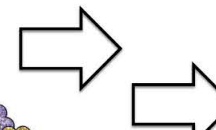
Geometry Task Cards 32



Name this angle.

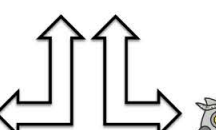
Geometry Task Cards 25

Translation, Reflection, or Rotation?




Geometry Task Cards 26

Translation, Reflection, or Rotation?




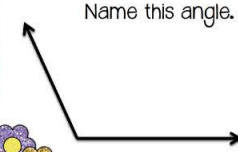
Geometry Task Cards 27

Translation, Reflection, or Rotation?



Geometry Task Cards 28

Name this angle.



MOVE AHEAD 3 SPACES!

ROLL AGAIN!

START

YOU'RE A HOOT! LOSE A TURN!

MOVE AHEAD 3 SPACES!

MOVE AHEAD 2 SPACES!

ROLL AGAIN!

YOU'RE A HOOT! LOSE A TURN!

ROLL AGAIN!

FINISH

ROLL AGAIN!

YOU'RE A HOOT! LOSE A TURN!

ROLL AGAIN!

INCLUDES:


- ✓ 32 CARDS
- ✓ VARIETY OF QUESTION TYPES
- ✓ RECORDING SHEET
- ✓ ANSWER KEY
- ✓ THEMED GAME BOARD

Geometry Task Cards

1. RAY BA	2. LINE QR OR RQ	3. LINE SE OR ZY
5. PARALLEL	6. PERPENDICULAR	7. INTERSECTING
9. TRIANGLE	10. PENTAGON	11. HEXAGON
13. RECTANGLE, PARALLELOGRAM, QUADRILATERAL	14. RECTANGLE, PARALLELOGRAM, QUADRILATERAL	15. RECTANGLE, PARALLELOGRAM, QUADRILATERAL, RHOMBUS

Geometry Task Cards Recording Sheet

2.	3.
6.	7.
10.	11.
14.	15.
18.	19.
22.	20.
26.	23.
30.	24.
	27.
	28.
	31.
	32.

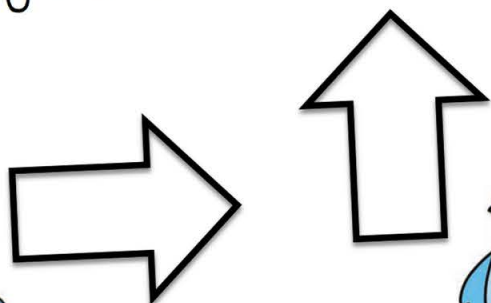


YOUR STUDENTS WILL BE BEGGING TO PLAY!!

Geometry Task Cards

21


Congruent, similar, or neither?



Geometry Task Cards

28


Name this angle.



Geometry Task Cards

7

What type of lines are these?



USE FOR CENTERS, EARLY FINISHERS, SMALL GROUPS & MORE. GREAT FOR PRACTICE & REVIEW!



"FABULOUS! MY KIDS LOVED USING THESE. WAY BETTER THAN A WORKSHEET!"



"I'M LOVIN' THESE CARDS. THEY COVER ALL OF GEOMETRY, AND I'M SUPER EXCITED TO LET MY STUDENTS DEVOUR THESE AS THEY LEARN AND REVIEW. THANK YOU."