

TEST PREP REVIEW TASK CARDS

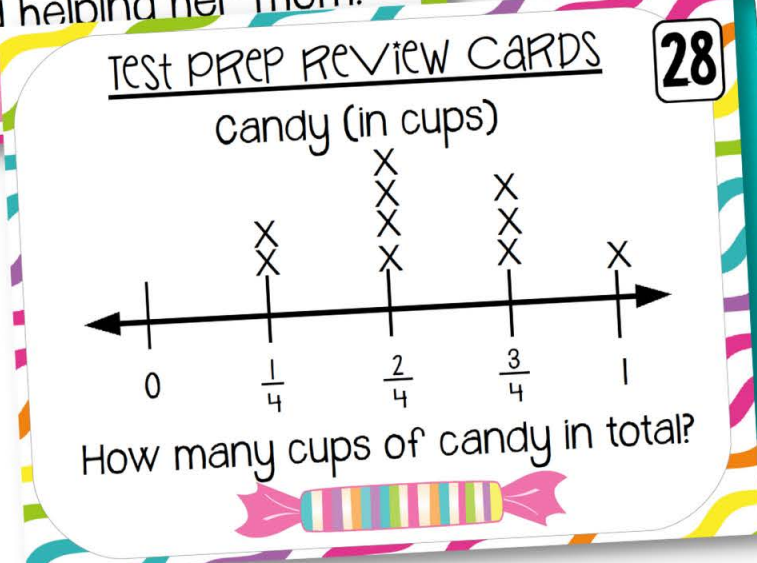
GRADE 5

Test Prep Review Cards 12

Last month, Shelly earned \$25.45 for helping babysitting and 6.50 for helping her mom around the house. How much more did Shelly earn babysitting than she did helping her mom?

Test Prep Review Cards 2

Jenna says that the value of the expression $1 + [4 \times (9 - 6)]$ is 31. Jared says the value is 10. Who is correct?



START

Roll Again

Move ahead 3 spaces.

You ate too much candy and you have a bellyache. Miss your next turn.

Roll Again

FINISH

Move ahead 2 spaces.

Roll Again

Move ahead 3 spaces.

You ate too much candy and you have a bellyache. Miss your next turn.

Roll Again

Move ahead 2 spaces.



32 REVIEW CARDS

32 DIFFERENT CARDS

TO PRACTICE THE SKILL!

TEST PREP REVIEW CARDS

1

$$[8 + (12-6)] \times 5$$

Solve.



TEST PREP REVIEW CARDS

2

Jenna says that the value of the expression $1 + [4 \times (9-6)]$ is 31. Jared says the value is 13. Who is correct? Explain



TEST PREP REVIEW CARDS

3

Write the expression for "add 498 and 86, then multiply by 10"?



TEST PREP REVIEW CARDS

4

Mandy had 15 cookies. She ate 3 cookies. Then she evenly divided the remaining with her friend, Ayannah. Write a numerical expression for the number of cookies Mandy now has.



TEST PREP REVIEW CARDS

5

Paul is picking apples in the orchard. He picks 14 apples from the first tree, 21 apples from the second tree, 28 apples from the third tree, 35 apples from the fourth tree, and 42 apples from the fifth tree. If this pattern continues, how many apples will Paul pick from the sixth tree?



TEST PREP REVIEW CARDS

6

1, , 9, 27, 81

What is the missing number?



TEST PREP REVIEW CARDS

7

$$9.75 \times 10^2$$

Solve.



TEST PREP REVIEW CARDS

8

Write the decimal. One and eighty-seven thousandths



TEST PREP REVIEW CARDS

9

Name 2 decimals that when rounded to the nearest tenth are 0.6.



TEST PREP REVIEW CARDS

10

There were 1,054 members at the local YMCA. Each member pays \$36 per month to belong to the club. How much money does the YMCA collect in membership each month?



TEST PREP REVIEW CARDS

11

Imani has 1,875 stickers in her collection. She put her stickers in a notebook. She could fit 25 stickers on each page. How many pages did she have to use?



TEST PREP REVIEW CARDS

12

Last month, Shelly earned \$25.45 for helping babysitting and 6.50 for helping her mom around the house. How much more did Shelly earn babysitting than she did helping her mom?



TEST PREP REVIEW CARDS

13

George bought 6.5 pounds of candy for \$0.96 per pound. How much did George spend on candy?



TEST PREP REVIEW CARDS

14

Hershel made it to the candy factory. He traveled 256.68 miles in 4.5 hours. On average, how many miles per hour did he drive?



TEST PREP REVIEW CARDS

15

If Jessica reads 10 pages a night starting on Monday, how many pages would she have read by bedtime Friday?



TEST PREP REVIEW CARDS

16

$$\frac{5}{12} + \frac{1}{2}$$

Simplify if needed.



TEST PREP REVIEW CARDS

17

David and his brother, Frank, opened a savings account at the same time. So far, David has saved \$105.69 and Frank has saved \$105.61. Who has saved the greater amount?



TEST PREP REVIEW CARDS

18

Round to the nearest hundredth.

785.269



TEST PREP REVIEW CARDS

19

Mrs. Yorgey made party mix for the dance. The mix had $5\frac{1}{2}$ cups of cereal and $1\frac{3}{4}$ cups of chocolate chips. How many cups of party mix did she make? Simplify as needed.



TEST PREP REVIEW CARDS

20

On Monday Glenn worked $4\frac{5}{8}$ hours at the Candy Shoppe. On Thursday he worked $2\frac{1}{4}$ hours. How many more hours did he work on Monday than Thursday? Simplify if needed.



TEST PREP REVIEW CARDS

21

$$\frac{3}{4} \times \frac{8}{9}$$

Simplify if needed.



TEST PREP REVIEW CARDS

22

The manager at the candy store wanted to fill the gumball machine. The machine can handle 4 boxes of gumballs. If each box is $\frac{3}{4}$ pounds, can the gumball machine hold more or less than 4 pounds of gumballs?



TEST PREP REVIEW CARDS

23

$$6 \div \frac{1}{2}$$



TEST PREP REVIEW CARDS

24

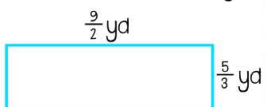
One-half of a pizza is left. Patty and her 4 friends were going to share it. What fraction of the pizza will each person get?



TEST PREP REVIEW CARDS

25

Find the area of the rectangle.



TEST PREP REVIEW CARDS

26

$$10 \text{ pt} = \text{---} \text{ qt}$$

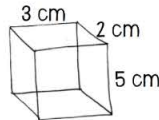
(1 qt = 2 pt)



TEST PREP REVIEW CARDS

29

What is the volume of the cube?



TEST PREP REVIEW CARDS

30

Ana's box of candy is 10 inches long, 8 inches wide, and 12 inches high. Janis's box is 6 inches long, 15 inches wide, and 10 inches high. Whose box has the greater volume?



TEST PREP REVIEW CARDS

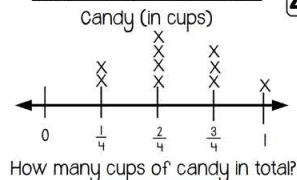
27

At the Candy Shoppe, the workers made a large piece of taffy measuring 4 yards in length! If they cut it into 3 equal pieces, how many inches long is each piece?



TEST PREP REVIEW CARDS

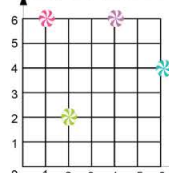
28



TEST PREP REVIEW CARDS

31

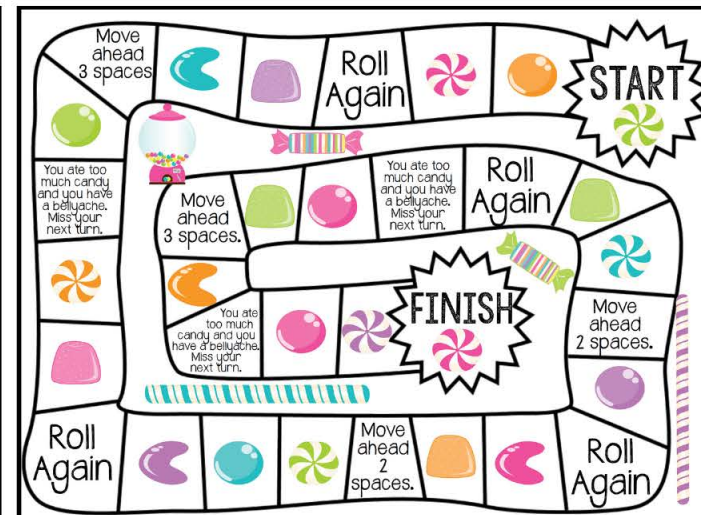
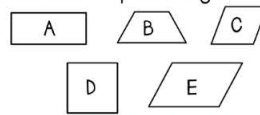
What color is the candy at location 6,4?



TEST PREP REVIEW CARDS

32

Which quadrilaterals could be considered parallelograms?



INCLUDES:

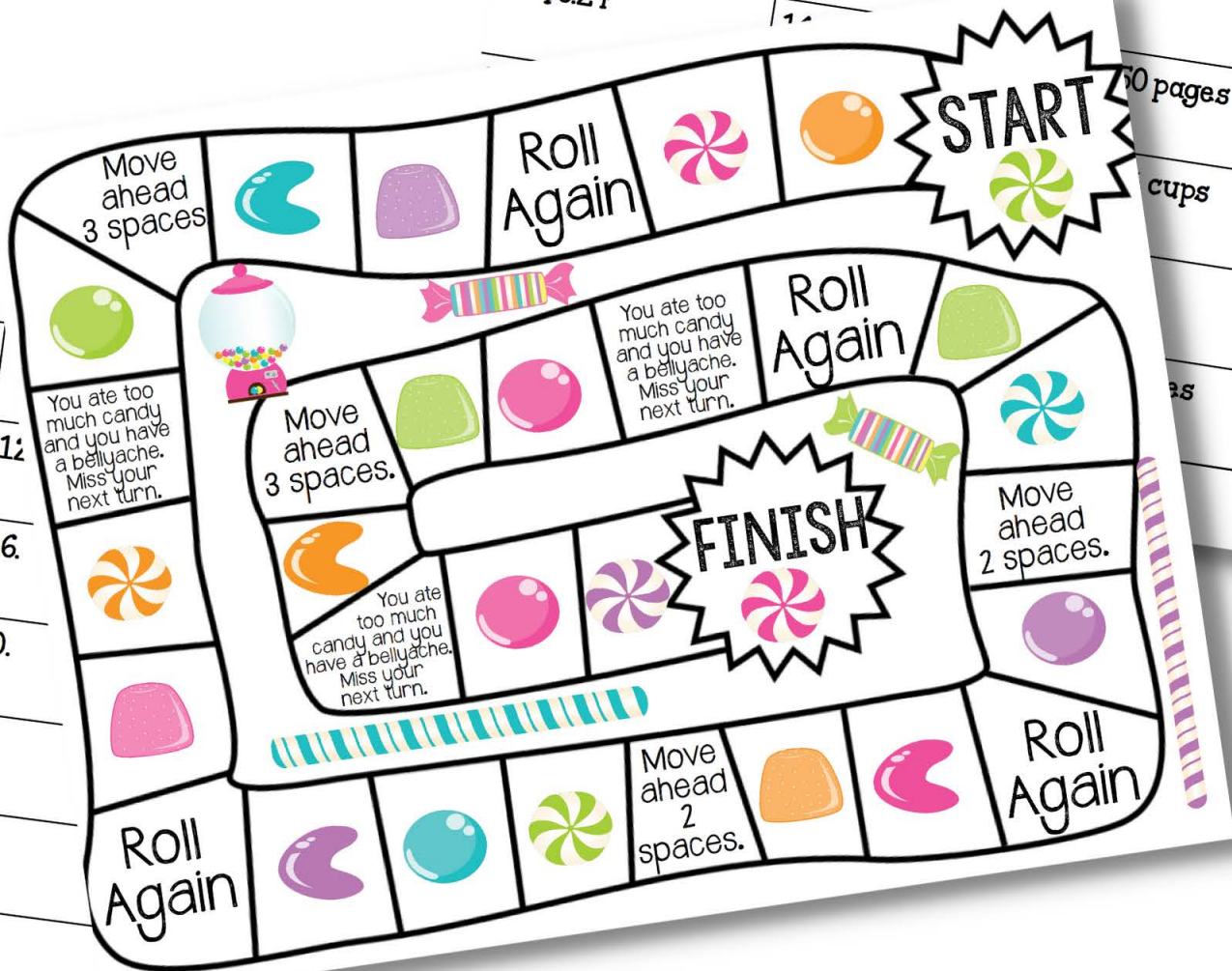
- ✓ 32 CARDS
- ✓ VARIETY OF QUESTION TYPES
- ✓ RECORDING SHEET
- ✓ ANSWER KEY
- ✓ THEMED GAME BOARD

Test PREP REVIEW ANSWERS

1. 70	2. Jared because you have to do parenthesis first.	3. $(498+86)$
5. 49	6. 3	7. 975
9. 0.55, 0.56, 0.57, 0.58, 0.59, 0.60, 0.61, 0.62, 0.63, 0.64 (any 2)	10. \$37,944	11. 75 pages
13. \$6.24		

Test PREP REVIEW RECORDING SHEET

2.	3.
6.	7.
10.	11.
14.	15.
18.	19.
22.	23.
26.	27.
30.	31.
	32.



YOUR STUDENTS WILL BE BEGGING TO PLAY!!

Test Prep Review CARDS **31**

What color is the candy at location 6,4?

Test Prep Review CARDS **22**

The manager at the candy store wanted to fill the gumball machine. The machine can handle 4 boxes of gumballs. If each box is $\frac{3}{4}$ pounds, can the gumball machine hold more or less than 4 pounds of gumballs?

Test Prep Review CARDS **6**

1, , 9, 27, 81

What is the missing number?

USE FOR CENTERS, EARLY FINISHERS, SMALL GROUPS & MORE. GREAT FOR PRACTICE & REVIEW!



"THIS WAS A FANTASTIC RESOURCE FOR MY STUDENTS. THANK YOU SO MUCH FOR THIS RESOURCE. THIS WAS A CREATIVE WAY TO REVIEW AND MY STUDENTS LOVED IT."



"THESE WERE PERFECT FOR THE CLASSROOM. KEPT STUDENTS ENGAGED AND BUSY WHILE THEY WERE LEARNING AND PRACTICING SKILLS. IT ALSO GAVE ME A GOOD RESOURCE TO USE FOR A FORMATIVE ASSESSMENT."